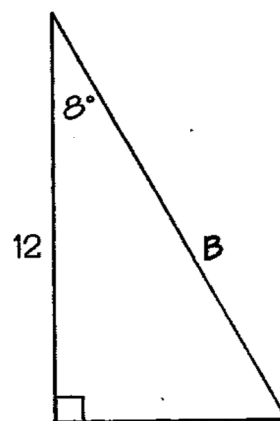
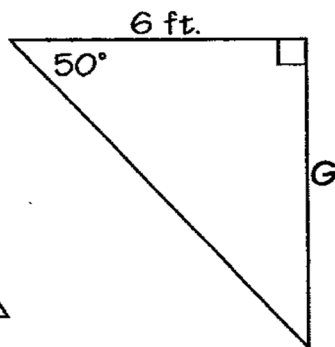
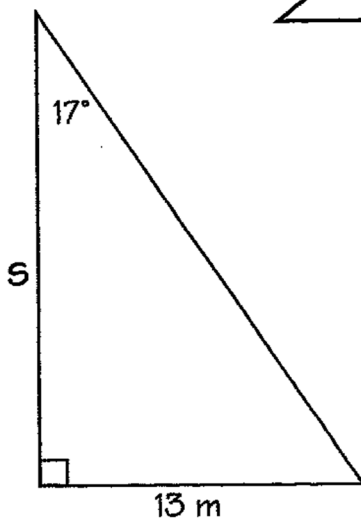
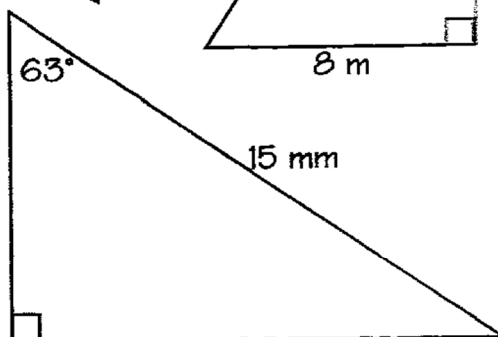
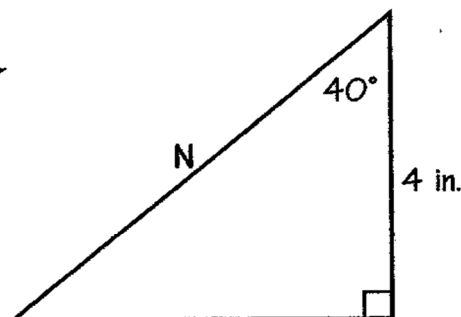
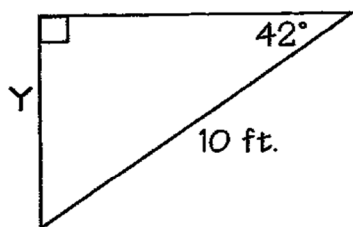
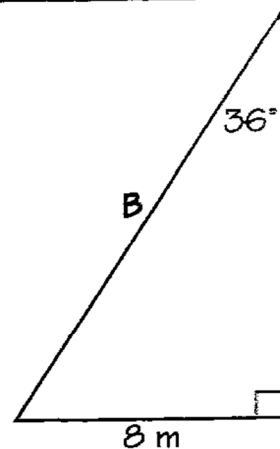
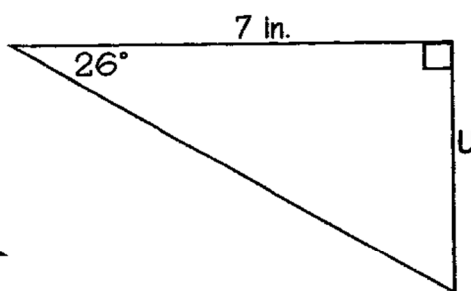
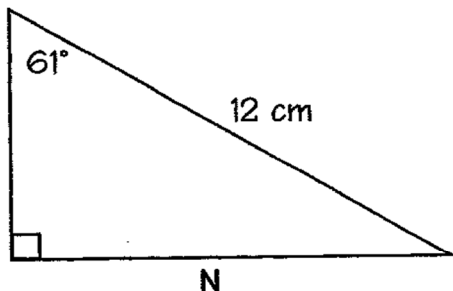


# What do you get if you cross an insect with the Easter rabbit?

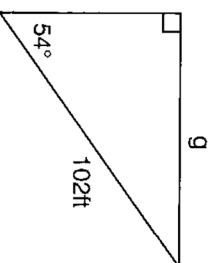
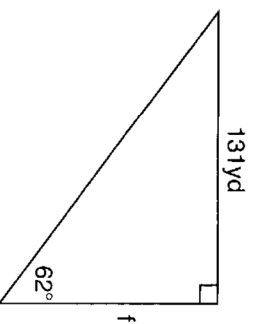
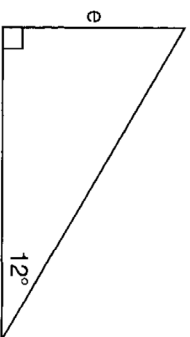
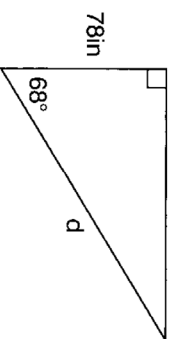
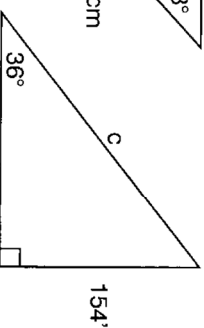
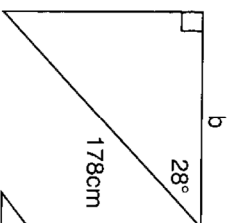
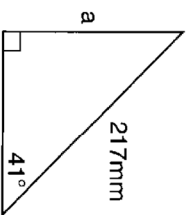
Find the missing variables. Round your answers to the nearest tenth.  
To figure out the joke, place the letter of each problem above the answer on the line(s) below. Some blanks will go unfilled.



11.4   12.1   3.4   7.2   42.5   8.6   4.2   13.6   6.8   10.5   5.2   6.7

## Triangles — Trigonometry Find to Missing Sides — Crossword

Find the missing sides. In order to figure out the crossword, you must round your answer to the nearest whole number **after** finding the exact answer. Answers found using tables might be slightly off making the crossword incorrect. To check the accuracy of your responses, place your answers in the crossword grid.



### Across

1.  $b =$  \_\_\_\_\_
2.  $c =$  \_\_\_\_\_
5.  $g =$  \_\_\_\_\_

### Down

1.  $a =$  \_\_\_\_\_
2.  $d =$  \_\_\_\_\_
3.  $e =$  \_\_\_\_\_
4.  $f =$  \_\_\_\_\_

## Triangles — Trigonometry to Find Missing Sides — Crossword

